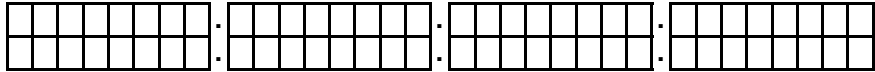


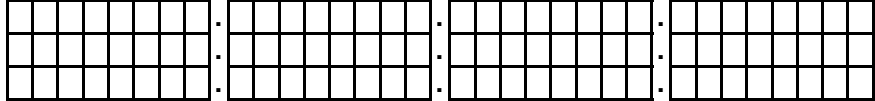
Summarize the following small networks to one large network

80.218.1.0/24
80.218.2.0/24



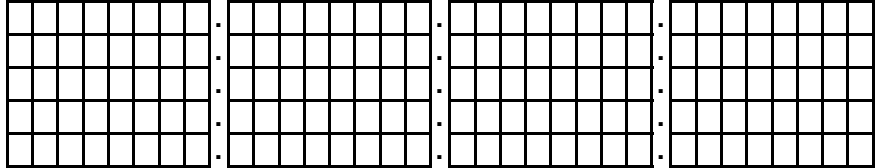
IP: _____ / _____ Mask: _____

172.16.0.0/24
172.16.1.0/24
172.16.2.0/24



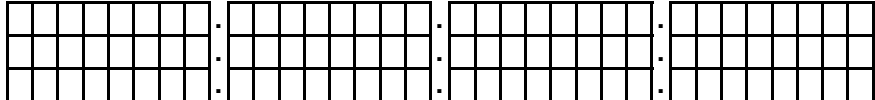
IP: _____ / _____ Mask: _____

192.168.1.0/24
192.168.2.0/24
192.168.3.0/24
192.168.6.0/24
192.168.7.0/24



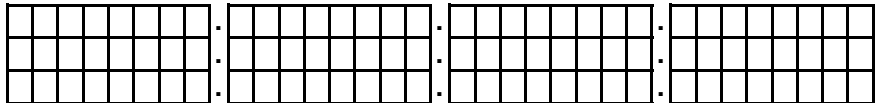
IP: _____ / _____ Mask: _____

10.25.0.0/24
10.25.1.0/24
10.26.2.0/24



IP: _____ / _____ Mask: _____

122.248.0.0/13
122.240.0.0/14
122.245.16.0/20



IP: _____ / _____ Mask: _____